

CS-171, Intro to A.I. — Mid-term Exam — Fall Quarter, 2014

YOUR NAME: _____

YOUR ID: _____ ID TO RIGHT: _____ ROW: _____ SEAT: _____

The exam will begin on the next page. Please, do not turn the page until told.

When you are told to begin the exam, please check first to make sure that you have all ten pages, as numbered 1-10 in the bottom-right corner of each page. We wish to avoid copy problems. We will supply a new exam for any copy problems.

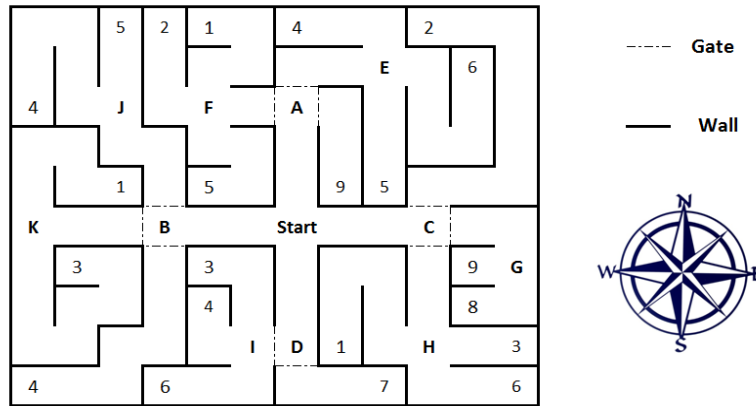
The exam is closed-notes, closed-book. No calculators, cell phones, electronics.

Please clear your desk entirely, except for pen, pencil, eraser, a blank piece of paper (for scratch pad use), and an optional water bottle. Please write your name and ID# on the blank piece of paper and turn it in with your exam.

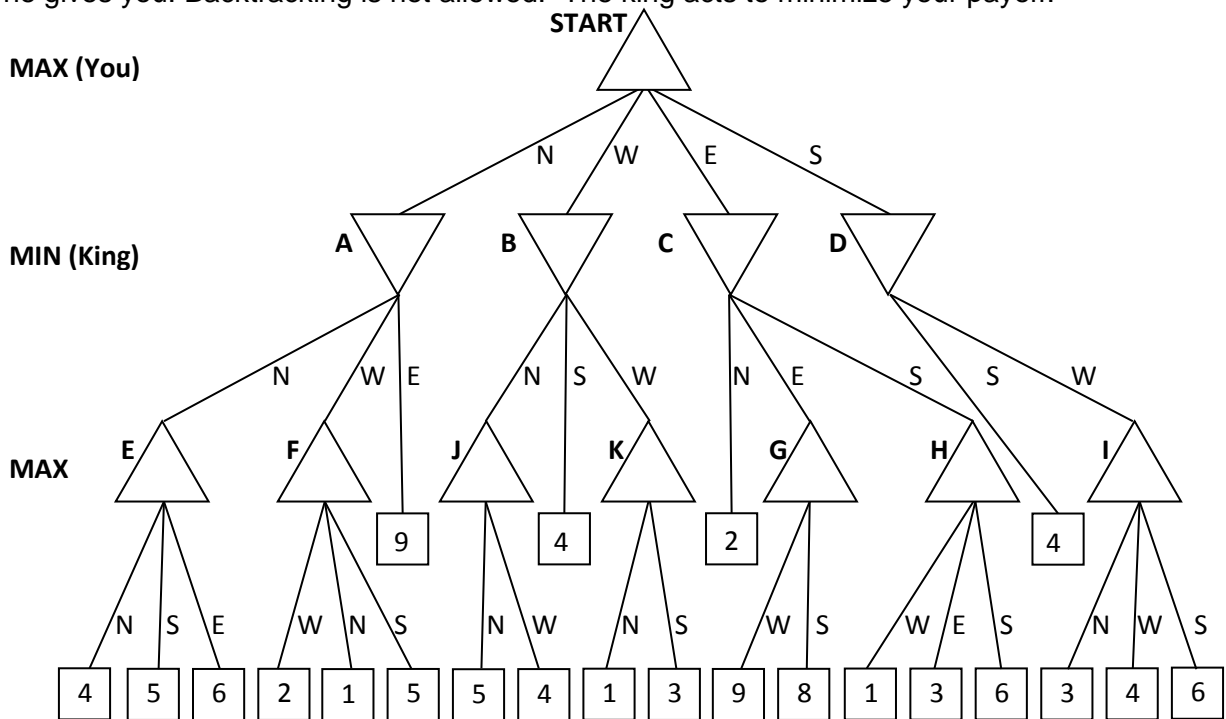
This page summarizes the points for each question, so you can plan your time.

1. (10 pts total, -1 pt each wrong answer, but not negative) MINIMAX WITH ALPHA-BETA PRUNING.
2. (10 pts total, 2 pts each) CSP WITH BACKTRACKING SEARCH.
3. (6 pts total, 2 pts each) CONVERSION TO CNF.
4. (6 pts total, 2 pts each) RESOLUTION OF CLAUSES.
5. (10 pts total, 1 pt each) LOGIC.
6. (8 pts total, 2 pts each) TASK ENVIRONMENT.
7. (10 pts total, 1/2 pt each) SEARCH PROPERTIES.
8. (15 points total, 3 pts each) CONSTRAINT SATISFACTION PROBLEMS.
9. (10 pts total) RESOLUTION THEOREM PROVING.
10. (15 pts total, 3 pts each) STATE-SPACE SEARCH.

1. (10 pts total, -1 pt each wrong answer, but not negative) **MINIMAX WITH ALPHA-BETA PRUNING**. While visiting Crete, you are challenged by a passing king to what he calls the "Labyrinth Challenge". The rules are simple: you must make your way through a maze to find the largest prize for yourself. You are given the following map to plan your route:



You will start in the maze at the location labeled START and may travel North (N), South (S), East (E), or West (W). Your goal is to secure the largest, single prize for yourself, represented by the numbers spread across the maze. At four specific intersections (A, B, C, D), the king will be able to close off all but one pathway by closing gates around you, forcing you to take the path he gives you. Backtracking is not allowed. The king acts to minimize your payoff.



1.a. Fill in each blank triangle with its Mini-Max value. Process the game tree left-to-right.

1.b. Cross out each leaf node that will be pruned by Alpha-Beta pruning. Go left-to-right.

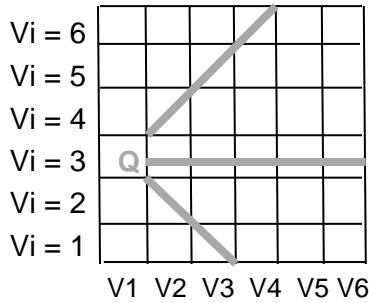
1.c. What is the best move for MAX? (write N, W, E, or S) _____

**** TURN PAGE OVER AND CONTINUE ON THE OTHER SIDE ****

2.c. (2 pts) Write the next selected variable, or "Fail" if you need to backtrack now: _____

Write the value assigned to the selected variable: _____

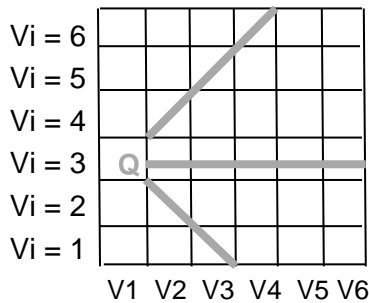
Write Q where you put your queen. Draw a line through values removed by Forward Checking. You will find it helpful to propagate your previous Qs and lines, but that is not required.



2.d. (2 pts) Write the next selected variable, or "Fail" if you need to backtrack now: _____

Write the value assigned to the selected variable: _____

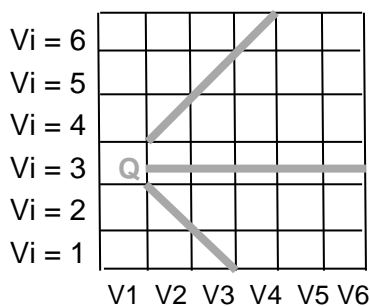
Write Q where you put your queen. Draw a line through values removed by Forward Checking. You will find it helpful to propagate your previous Qs and lines, but that is not required.



2.e. (2 pts) Write the next selected variable, or "Fail" if you need to backtrack now: _____

Write the value assigned to the selected variable: _____

Write Q where you put your queen. Draw a line through values removed by Forward Checking. You will find it helpful to propagate your previous Qs and lines, but that is not required.

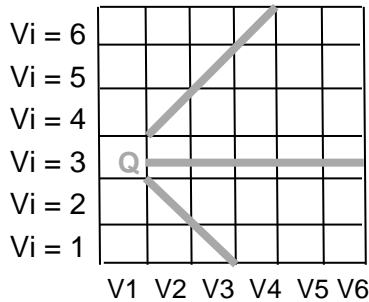


\\
**** TURN PAGE OVER AND CONTINUE ON THE OTHER SIDE ****

2.f. (2 pts) Write the next selected variable, or "Fail" if you need to backtrack now: _____

Write the value assigned to the selected variable: _____

Write Q where you put your queen. Draw a line through values removed by Forward Checking. You will find it helpful to propagate your previous Qs and lines, but that is not required.



3. (6 pts total, 2 pts each) **CONVERSION TO CNF.** Convert these expressions to CNF.

3.a. (2 pts) $(A \Leftrightarrow (B \vee C))$ _____

3.b. (2 pts) $((C \wedge D) \Rightarrow \neg E)$ _____

3.c. (2 pts) $((A \Rightarrow B) \Rightarrow C)$ _____

4. (6 pts total, 2 pts each) **RESOLUTION OF CLAUSES.** Use resolution to resolve the following pairs of clauses, simplify, and write the resulting clause. If no resolution is possible write "None". If the resolvent simplifies to True write "True." If more than one resolution is possible, pick any one that you like, and write its simplified result.

4.a. (2 pts) Resolve $(A B C)$ with $(B \neg C \neg D)$ to yield _____

4.b. (2 pts) Resolve $(A B C)$ with $(\neg B \neg C \neg D)$ to yield _____

4.c. (2 pts) Resolve $(A B C)$ with $(B C \neg D)$ to yield _____

5. (10 pts total, 1 pt each) LOGIC. Which of the following are correct? (**T = True, F = False**). Recall that the symbol " \models " means "entails."

5.a. (1 pt) _____ $False \models True$.

5.b. (1 pt) _____ $True \models False$.

5.c. (1 pt) _____ $(A \wedge B) \models (A \leftrightarrow B)$.

5.d. (1 pt) _____ $(A \leftrightarrow B) \models (A \vee B)$.

5.e. (1 pt) _____ $(A \leftrightarrow B) \models (\neg A \vee B)$.

5.f. (1 pt) _____ $((A \wedge B) \Rightarrow C) \models (A \Rightarrow C) \vee (B \Rightarrow C)$.

5.g. (1 pt) _____ $(A \vee B) \wedge (\neg C \vee \neg D \vee E) \models (A \vee B)$.

5.h. (1 pt) _____ $(A \vee B) \wedge (\neg C \vee \neg D \vee E) \models (A \vee B) \wedge (\neg D \vee E)$.

5.i. (1 pt) _____ $(A \vee B) \wedge \neg (A \Rightarrow B)$ is satisfiable.

5.j. (1 pt) _____ $(A \leftrightarrow B) \wedge (\neg A \vee B)$ is satisfiable.

6. (8 pts total, 2 pts each) TASK ENVIRONMENT. Your book defines a task environment as a set of four things, with the acronym PEAS. Fill in the blanks with the names of the PEAS components.

P _____ E _____ A _____ S _____

7. (10 pts total, 1/2 pt each) SEARCH PROPERTIES.

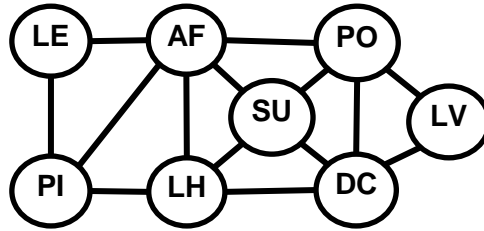
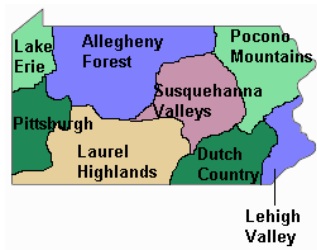
Fill in the values of the four evaluation criteria for each search strategy shown. Assume a tree search where b is the finite branching factor; d is the depth to the shallowest goal node; m is the maximum depth of the search tree; C^* is the cost of the optimal solution; step costs are identical and equal to some positive ϵ ; and in Bidirectional search both directions using breadth-first search.

Note that these conditions satisfy all of the footnotes of Fig. 3.21 in your book.

Criterion	Complete?	Time complexity	Space complexity	Optimal?
Breadth-First				
Uniform-Cost				
Depth-First				
Iterative Deepening				
Bidirectional (if applicable)				

**** TURN PAGE OVER AND CONTINUE ON THE OTHER SIDE ****

8. (15 points total, 3 pts each) CONSTRAINT SATISFACTION PROBLEMS.



AF = Allegheny Forest
 DC = Dutch Country
 LE = Lake Erie
 LH = Laurel Highlands
 LV = Lehigh Valley
 PI = Pittsburgh
 PO = Pocono Mountains
 SU = Susquehanna Valleys

You are a map-coloring robot assigned to color this Pennsylvania region map. Adjacent regions must be colored a different color (R=Red, B=Blue, G=Green). The constraint graph is shown.

8.a. (3 pts total) FORWARD CHECKING. Cross out all values that would be eliminated by Forward Checking, after variable LH has just been assigned value G, as shown:

AF	DC	LE	LH	LV	PI	PO	SU
R G B	R G B	R G B	G	R G B	R G B	R G B	R G B

8.b. (3 pts total) ARC CONSISTENCY.

AF and LE have been assigned values, but no constraint propagation has been done. Cross out all values that would be eliminated by Arc Consistency (AC-4 in your book).

AF	DC	LE	LH	LV	PI	PO	SU
B	R G B	R	R G B	R G B	R G B	R G B	R G B

8.c. (3 pts total) MINIMUM-REMAINING-VALUES HEURISTIC. Consider the assignment below. PO is assigned and constraint propagation has been done. List all unassigned variables that might be selected by the Minimum-Remaining-Values (MRV) Heuristic: _____.

AF	DC	LE	LH	LV	PI	PO	SU
G B	G B	R G B	R G B	G B	R G B	R	G B

8.d. (3 pts total) DEGREE HEURISTIC. Consider the assignment below. (It is the same assignment as in problem 8.c. above.) PO is assigned and constraint propagation has been done. List all unassigned variables that might be selected by the Degree Heuristic: _____.

AF	DC	LE	LH	LV	PI	PO	SU
G B	G B	R G B	R G B	G B	R G B	R	G B

8.e. (3 pts total) MIN-CONFLICTS HEURISTIC. Consider the complete but inconsistent assignment below. AF has just been selected to be assigned a new value during local search for a complete and consistent assignment. What new value would be chosen below for AF by the Min-Conflicts Heuristic? _____.

AF	DC	LE	LH	LV	PI	PO	SU
?	G	G	R	G	B	B	G

9. (10 pts total) **RESOLUTION THEOREM PROVING.** Solve this puzzle as a logic agent.

“Three girls took part in a race. Alison (A) finished before Betty (B) but behind Clare (C). What was the finishing order?”

Obviously, the finishing order was C, A, B. You will use resolution to prove this fact.

You create 9 propositional variables, A/B/C1/2/3, to indicate that A, B, or C finished in place 1, 2, or 3. Your Knowledge Base is:

Alison (A) finished before Betty (B): $((A1 \wedge B2) \vee (A1 \wedge B3) \vee (A2 \wedge B3))$

Alison (A) finished behind Clare (C): $((C1 \wedge A2) \vee (C1 \wedge A3) \vee (C2 \wedge A3))$

Each contestant finished exactly one of first, second, or third:

$((A1 \Rightarrow \neg(A2 \vee A3)) \wedge ((A2 \Rightarrow \neg(A1 \vee A3)) \wedge ((A3 \Rightarrow \neg(A1 \vee A2))$

$((B1 \Rightarrow \neg(B2 \vee B3)) \wedge ((B2 \Rightarrow \neg(B1 \vee B3)) \wedge ((B3 \Rightarrow \neg(B1 \vee B2))$

$((C1 \Rightarrow \neg(C2 \vee C3)) \wedge ((C2 \Rightarrow \neg(C1 \vee C3)) \wedge ((C3 \Rightarrow \neg(C1 \vee C2))$

Finishing first, second, or third is mutually exclusive among contestants:

$((A1 \Rightarrow \neg(B1 \vee C1)) \wedge ((B1 \Rightarrow \neg(A1 \vee C1)) \wedge ((C1 \Rightarrow \neg(A1 \vee B1))$

$((A2 \Rightarrow \neg(B2 \vee C2)) \wedge ((B2 \Rightarrow \neg(A2 \vee C2)) \wedge ((C2 \Rightarrow \neg(A2 \vee B2))$

$((A3 \Rightarrow \neg(B3 \vee C3)) \wedge ((B3 \Rightarrow \neg(A3 \vee C3)) \wedge ((C3 \Rightarrow \neg(A3 \vee B3))$

Thus, your Knowledge Base after conversion to CNF is:

$(A1 A2)$	$(A1 B3)$	$(B2 B3)$
$(A2 A3)$	$(A3 C1)$	$(C1 C2)$
$(\neg A1 \neg A2)$	$(\neg A1 \neg A3)$	$(\neg A2 \neg A3)$
$(\neg B1 \neg B2)$	$(\neg B1 \neg B3)$	$(\neg B2 \neg B3)$
$(\neg C1 \neg C2)$	$(\neg C1 \neg C3)$	$(\neg C2 \neg C3)$
$(\neg A1 \neg B1)$	$(\neg A1 \neg C1)$	$(\neg B1 \neg C1)$
$(\neg A2 \neg B2)$	$(\neg A2 \neg C2)$	$(\neg B2 \neg C2)$
$(\neg A3 \neg B3)$	$(\neg A3 \neg C3)$	$(\neg B3 \neg C3)$

Your goal sentence is $(C1 \wedge A2 \wedge B3)$ so your negated goal sentence is:

$(\neg C1 \neg A2 \neg B3)$

Produce a resolution proof that the finishing order was $(C1 \wedge A2 \wedge B3)$.

Repeatedly choose two clauses, write one clause in the first blank space on a line, and the other clause in the second. Apply resolution to them. Write the resulting clause in the third blank space, and insert it into the knowledge base. Continue until $()$. Use more lines if needed.

The first one is done for you as an example.

Resolve $(A1 A2)$ and $(\neg A1 \neg A3)$ to give $(A2 \neg A3)$

Resolve _____ and _____ to give _____

Resolve _____ and _____ to give _____

Resolve _____ and _____ to give _____

Resolve _____ and _____ to give _____

Resolve _____ and _____ to give _____

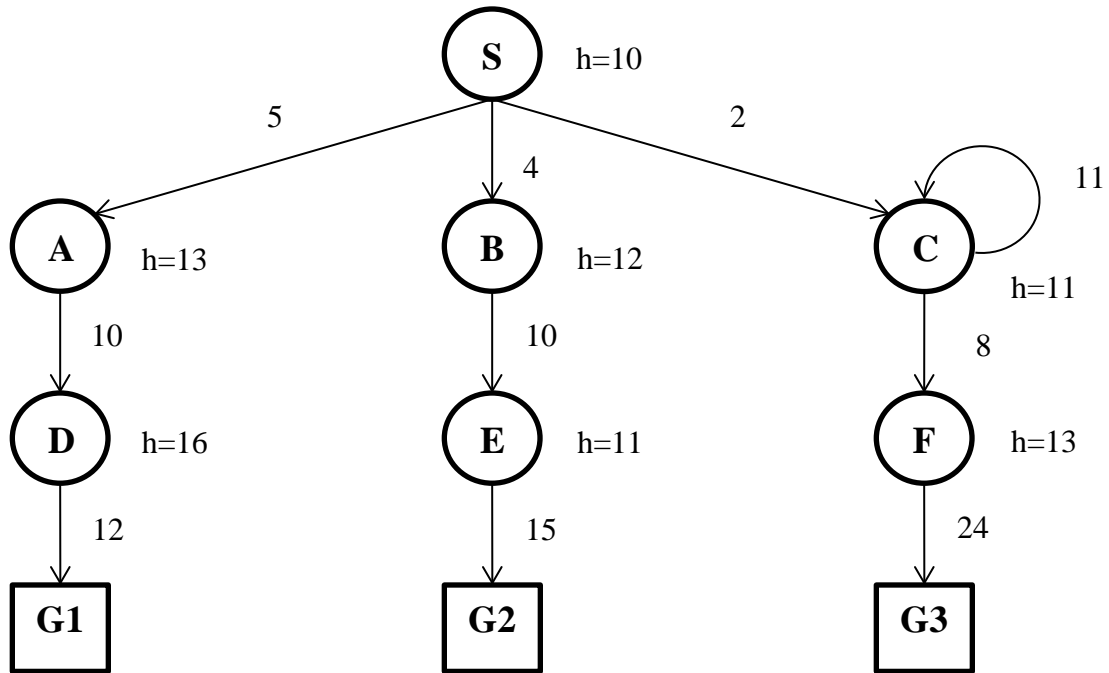
Resolve _____ and _____ to give _____

Resolve _____ and _____ to give _____

Resolve _____ and _____ to give $()$

10. (15 pts total, 3 pts each) STATE-SPACE SEARCH. Execute Tree Search through this graph (i.e., do not remember visited nodes, so repeated nodes are possible). It is not a tree, but pretend you don't know that. Step costs are given next to each arc. Heuristic values are given next to each node (as $h=x$). The successors of each node are indicated by the arrows out of that node. Successors are returned in left-to-right order. The successors of S are A/B/C, and of C are F/C, in that order. C is a successor of itself.

For each search strategy below, indicate the order in which nodes are expanded (i.e, its children are generated), ending with the goal node that is found. The first one is done for you as an example.



10.a. DEPTH FIRST SEARCH.

S A D G1

10.b. (3 pts, -1 for each wrong answer, but not negative) UNIFORM COST SEARCH.

10.c. (3 pts, -1 for each wrong answer, but not negative) GREEDY (BEST-FIRST) SEARCH.

10.d. (3 pts, -1 for each wrong answer, but not negative) ITERATED DEEPENING SEARCH.

10.e. (3 pts, -1 for each wrong answer, but not negative) A* SEARCH.

10.f. (3 pts, -1 for each wrong answer, but not negative) OPTIMALITY.

Did Uniform Cost Search find the optimal goal? _____ Why or why not? _____

Did A* Search find the optimal goal? _____ Why or why not? _____

****** THIS IS THE END OF THE MID-TERM EXAM ******